
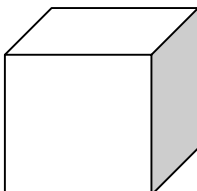



Fill in the blank:

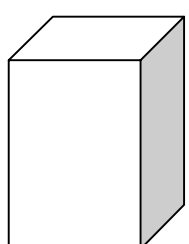
- Form is a _____.
- Value is _____, _____, and _____.
- Lines make _____.
- Shapes make _____.
- Shapes are ____-D. Forms are ____D.
- _____ make shapes.
- _____ make forms.
- Forms are ____D. Shapes are ____-D.

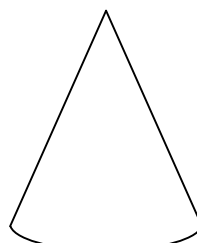


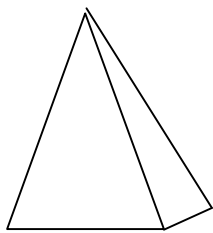
Label and draw:

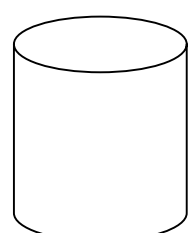
form name:		draw here:
face shape:		
rendered shape:		

form name:		draw here:
face shape:		
rendered shape:		

form name:		draw here:
face shape:		
rendered shape:		

form name:		draw here:
face shape:		
rendered shape:		

form name:		draw here:
face shape:		
rendered shape:		

form name:		draw here:
face shape:		
rendered shape:		